

LESSON 6:

PIES OF TIME BINGO

Directions

DONE (the goal)

This variation on the game of bingo will help you build your ability to visualize time, which is an important part of successful time management. You will practice picturing slices of time in three separate ways that match the cards pictured below:


- when you see a digital image of time,
- when you hear or read a specific number of minutes (for instance, “10 minutes”), and
- when you think about a daily life situation.

Examples of time cards and board:

__:20

15
minutes

Dave started jogging at 2:05 p.m. He jogged until 2:50 p.m. How much time did he spend jogging?




DO (the steps you will take)

- On each turn, you will select a card and place a bingo marker on the corresponding slice of time on your bingo board. *Note:* You can only place one marker per turn (e.g., for the bingo board on this page, if you draw a card that reads “_:15,” you can only place a marker on one of the 15-minute wedges shown).
- The first player to complete a row wins.


GET READY (the materials you will need)

- A copy of a Pies of Time Bingo Board (from the following pages)
- Bingo time cards (photocopied and cut out from the following pages)
- Bingo markers (you can use items like scraps of paper, checkers, coins, etc. to mark the board)


Activity: Pies of Time Bingo Boards




VISUALIZING TIME BINGO



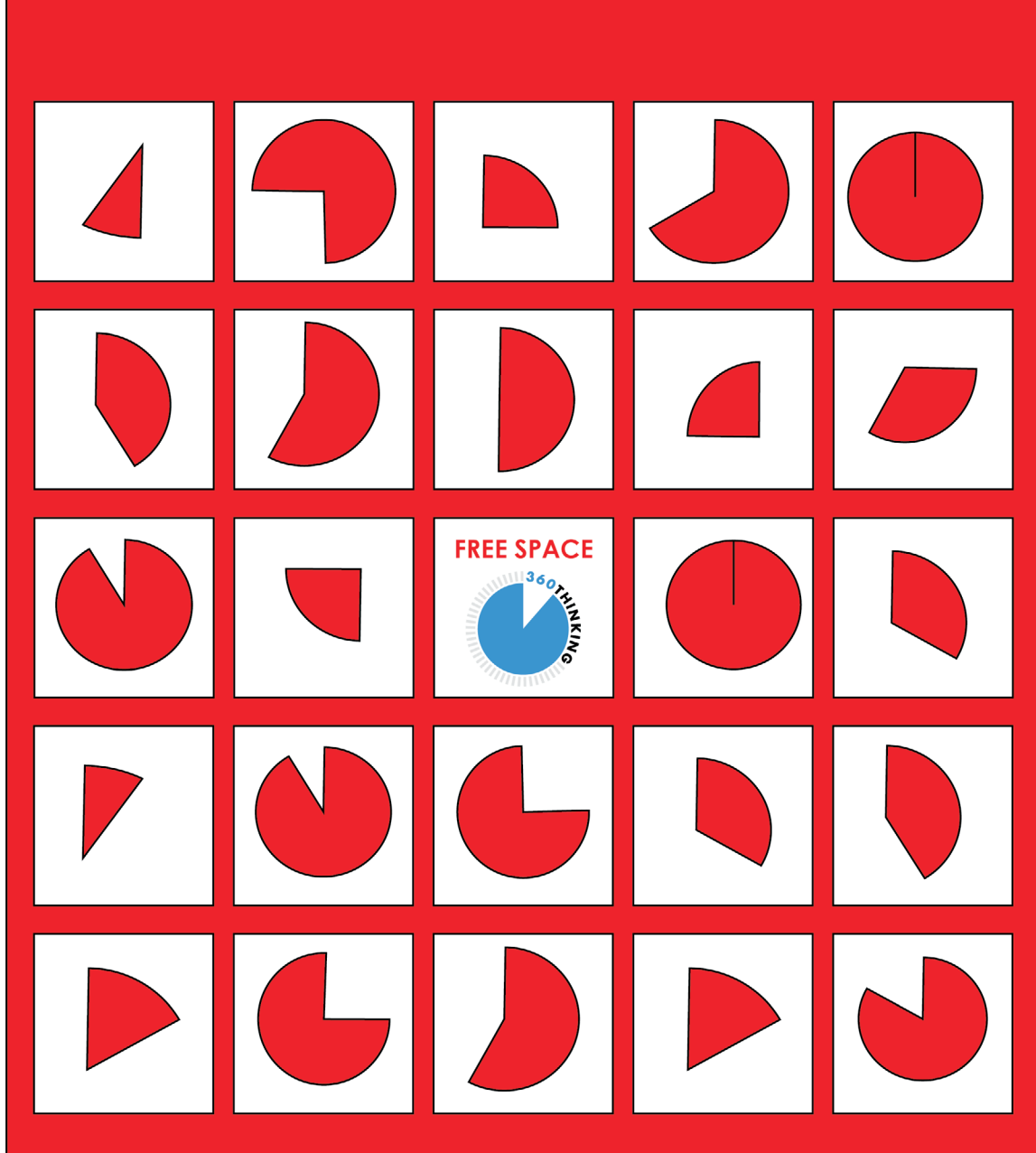
VISUALIZING TIME BINGO




VISUALIZING TIME BINGO



VISUALIZING TIME BINGO



VISUALIZING TIME BINGO



Pies of Time Bingo Time Cards

55 minutes	5 minutes	50 minutes	45 minutes	half hour
20 min- utes	45 min- utes	35 minutes	10 minutes	50 minutes
60 minutes	25 minutes	40 minutes	10 minutes	15 minutes
15 minutes	5 minutes	25 minutes	15 minutes	35 minutes
30 minutes	20 minutes	55 minutes	60 minutes	40 minutes

LESSON 6: PIES OF TIME BINGO

__:55	__:05	__:20	__:45	__:30
__:60	__:45	__:35	__:10	__:50
__:30	__:25	__:40	__:10	__:15
__:40	__:05	__:25	__:15	__:35
__:50	__:20	__:55	__:60	__:10

Juan arrives at the theater at 3:35 p.m. The movie starts at 4:00 p.m. How much time does he have to wait in line and buy refreshments before the movie starts?	Yash arrived in the parking lot of the vet's office at 4:45 p.m. for the dog's 5:00 p.m. appointment. How long can they spend walking before checking in at the front desk?
Kim starts making her lunch for the next day at 8:50 p.m. She wants to start getting ready for bed at 9:00 p.m. How long does she have to make her lunch?	Charlie and his friends are celebrating his birthday. They all finish bowling at 5:15 p.m. and they have until 6:00 p.m. to eat their cake and pizza before they have to leave. How much time can they spend eating?
It is 8:40 a.m., and Anish and his mom must pack up the car with the beach bags they left by the door. They need to leave by 8:45 a.m. How much time do they have to pack up the car?	Sam arrives home after hockey practice at 4:50 p.m. and needs to quickly shower before the tutor arrives at 5:00 p.m. How much time is available to shower and get ready for the tutor?
Mara must meet with a math teacher after school at 2:30 p.m. The late bus leaves school at 3:30 p.m. How much time does she have to meet with the teacher and then get to the bus?	Olivia starts entering terms and definitions into an online quiz study app at 3:35 p.m. She needs to finish by 4:00 p.m., before her friend comes over to study. How much time does she have to enter the terms?
Derek is doing some chores around the house at 12:25 p.m. on Saturday. He plans to leave to meet up with friends at 1:00 p.m. How much time does he have to finish his chores?	Theo is watching videos online while having a snack after school at 2:30 p.m. He needs to leave the house at 2:50 p.m. for theater practice. How much time does he have to relax?
Gemma is hanging out at a friend's house and needs to start skateboarding home at 5:45 p.m. to arrive in time for dinner at 6:00 p.m. How long will it take her to skateboard home?	Chang and his dad are driving into the city to watch a baseball game. They leave their house at 4:00 p.m. and arrive at the ballpark at 4:55 p.m. How much time does it take them to get there?

Jake's alarm went off at 6:30 a.m. He hit the snooze button twice and finally got out of bed at 6:50 a.m. How much extra time did he spend in bed?	Amar is excited to watch the finale of his favorite TV show. It plays from 8:00 p.m. to 9:00 p.m. How long is his show?
Vanessa started jogging at 2:05 p.m. She jogged until 2:30 p.m. How much time did she spend jogging?	From 6:15 p.m. to 6:30 p.m., Ming created a music playlist on her iPhone. How much time did she spend making her playlist?
Dave went shopping at 5:10 p.m. If he got home at 6:00 p.m., how much time did he spend shopping?	Ken started homework at 5:00 p.m. and finished at 5:15 p.m. How much time was spent doing homework?
Owen fell asleep at 2:30 p.m. and napped until 3:15 p.m. How long was his nap?	To earn money, Nick started cleaning the garage at 2:20 p.m. and finished at 3:00 p.m. How much time did he spend cleaning?
Haley and Haley's brother cooked dinner. They started cooking at 5:15 p.m. and dinner was ready at 5:45 p.m. How much time did they spend cooking?	Naomi started picking up her room at 3:20 p.m. She was done at 3:25 p.m. How much time did she spend cleaning?
Sam started reading at 11:40 a.m. and read until 12:00 p.m. How much time did he spend reading?	Eliza watched part of a show on TV from 3:10 p.m. to 3:30 p.m. How much time did she spend watching the show?
Laura was at the shopping mall. She was trying on clothes from 10:45 a.m. to 11:45 a.m. How much time did she spend trying on clothes?	Ronin's band practice lasts from 11:00 a.m. to 11:45 a.m. How much time does the practice take?
Isabelle was at a soccer game from 1:20 p.m. to 1:55 p.m. How much time did she spend at the game?	Stella left her house at 4:00 p.m. to bike to her friend's house. She arrived at 4:10 p.m. How much time did her bike ride take?